














Wie heißen die Töne?

Bestimme die Tonhöhe.

	c''
	
	
	
	
	
	
	
	
	
	
	
	

Bestimme die Tondauer und Tonhöhe.

	<i>Halbe Note a'</i> <i>(2 Schläge)</i>
	
	
	
	
	
	
	
	
	
	
	
	